




Structure and Function in Living Systems

Name: _____

Skeletal Joints

Period: _____

Look at Figure 3 on p.474 of your textbook. Use it to fill out the chart below:

<i>joint type</i>	<i>kind of movement</i>	<i>machine example</i>
sliding joint		
ball-and-socket joint		
hinge joint		

On the diagram below, draw a line to the joint described, and write what type it is. Use information from p.474 of your book to help you.

vertebrae _____

shoulder _____

fingers _____

elbow _____

hip _____

hand bones _____

foot bones _____

toes _____

